

Answers

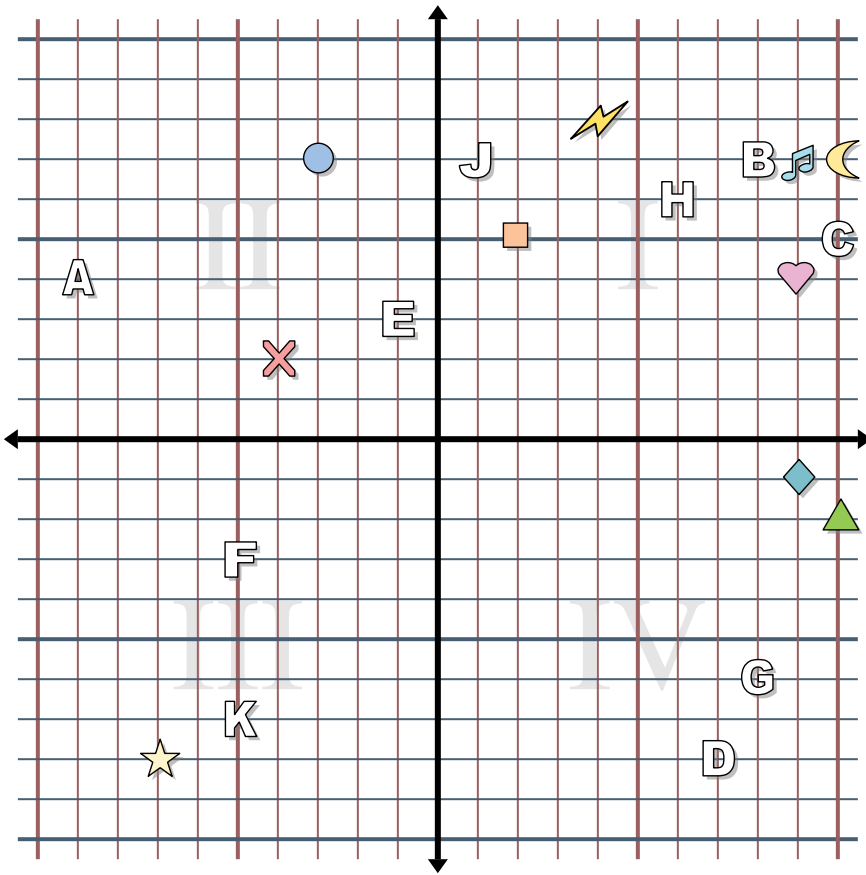
1. _____
2. _____
3. _____
4. _____
5. _____
6. _____
7. _____
8. _____
9. _____
10. _____
11. _____
12. _____
13. _____
14. _____
15. _____
16. _____
17. _____
18. _____
19. _____
20. _____

Determine the coordinates of each figure.

- | | |
|------------|----------------|
| 1) Star | 2) Lightning |
| 3) Circle | 4) Heart |
| 5) Cross | 6) Triangle |
| 7) Moon | 8) Square |
| 9) Diamond | 10) Music Note |

Determine which letter is at each coordinate.

- | | |
|---------------|---------------|
| 11) (10 , 5) | 12) (-5 , -3) |
| 13) (7 , -8) | 14) (1 , 7) |
| 15) (-5 , -7) | 16) (6 , 6) |
| 17) (-1 , 3) | 18) (8 , -6) |
| 19) (8 , 7) | 20) (-9 , 4) |



Answers

1. **(-7, -8)**
2. **(4, 8)**
3. **(-3, 7)**
4. **(9, 4)**
5. **(-4, 2)**
6. **(10, -2)**
7. **(10, 7)**
8. **(2, 5)**
9. **(9, -1)**
10. **(9, 7)**
11. **C**
12. **F**
13. **D**
14. **J**
15. **K**
16. **H**
17. **E**
18. **G**
19. **B**
20. **A**

Determine the coordinates of each figure.

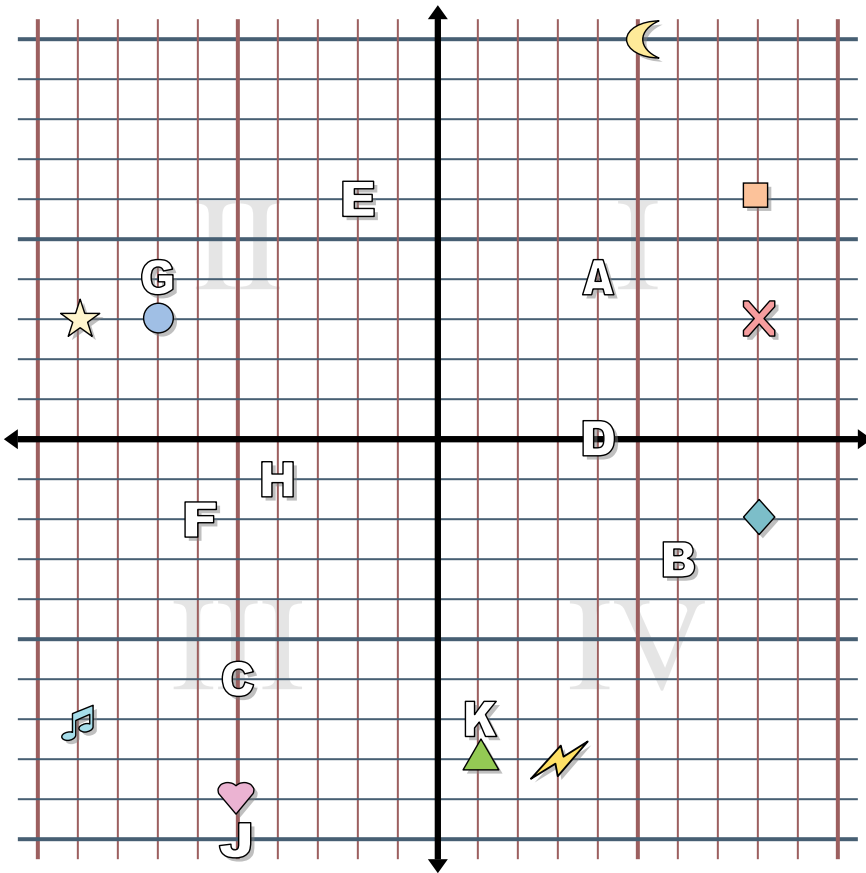
- | | |
|------------|----------------|
| 1) Star | 2) Lightning |
| 3) Circle | 4) Heart |
| 5) Cross | 6) Triangle |
| 7) Moon | 8) Square |
| 9) Diamond | 10) Music Note |

Determine which letter is at each coordinate.

- | | |
|--------------|--------------|
| 11) (10, 5) | 12) (-5, -3) |
| 13) (7, -8) | 14) (1, 7) |
| 15) (-5, -7) | 16) (6, 6) |
| 17) (-1, 3) | 18) (8, -6) |
| 19) (8, 7) | 20) (-9, 4) |



Answers



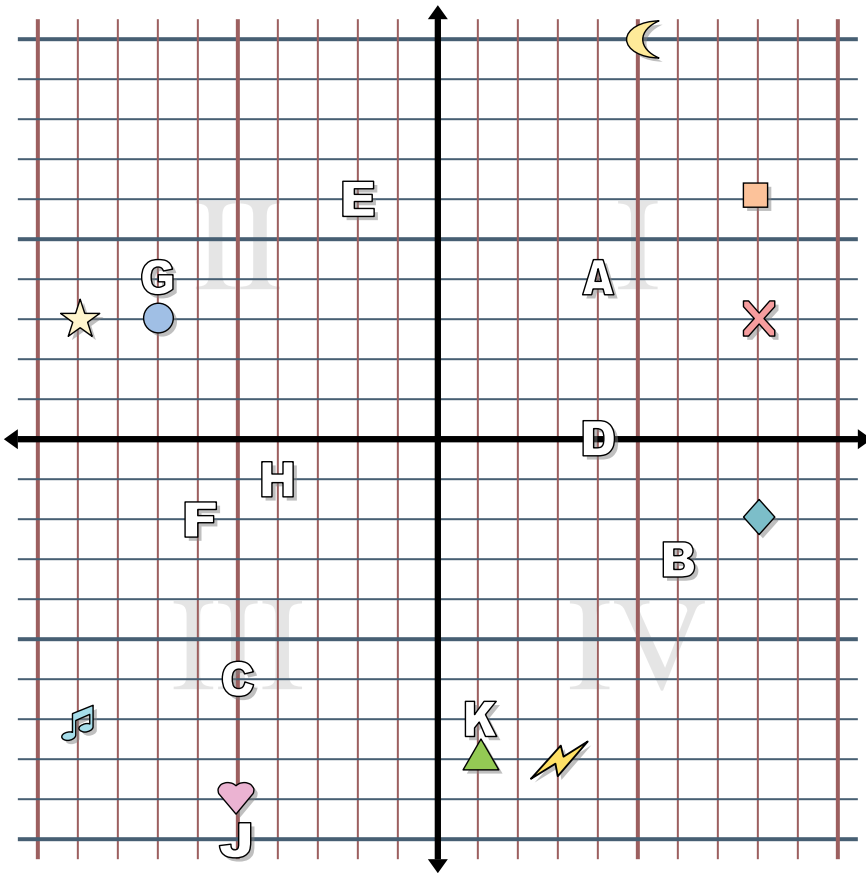
1. _____
2. _____
3. _____
4. _____
5. _____
6. _____
7. _____
8. _____
9. _____
10. _____
11. _____
12. _____
13. _____
14. _____
15. _____
16. _____
17. _____
18. _____
19. _____
20. _____

Determine the coordinates of each figure.

- | | |
|------------|----------------|
| 1) Star | 2) Lightning |
| 3) Circle | 4) Heart |
| 5) Cross | 6) Triangle |
| 7) Moon | 8) Square |
| 9) Diamond | 10) Music Note |

Determine which letter is at each coordinate.

- | | |
|---------------|----------------|
| 11) (-5 , -6) | 12) (4 , 4) |
| 13) (1 , -7) | 14) (-6 , -2) |
| 15) (-4 , -1) | 16) (-2 , 6) |
| 17) (6 , -3) | 18) (4 , 0) |
| 19) (-7 , 4) | 20) (-5 , -10) |



Answers

1. (-9, 3)
2. (3, -8)
3. (-7, 3)
4. (-5, -9)
5. (8, 3)
6. (1, -8)
7. (5, 10)
8. (8, 6)
9. (8, -2)
10. (-9, -7)
11. C
12. A
13. K
14. F
15. H
16. E
17. B
18. D
19. G
20. J

Determine the coordinates of each figure.

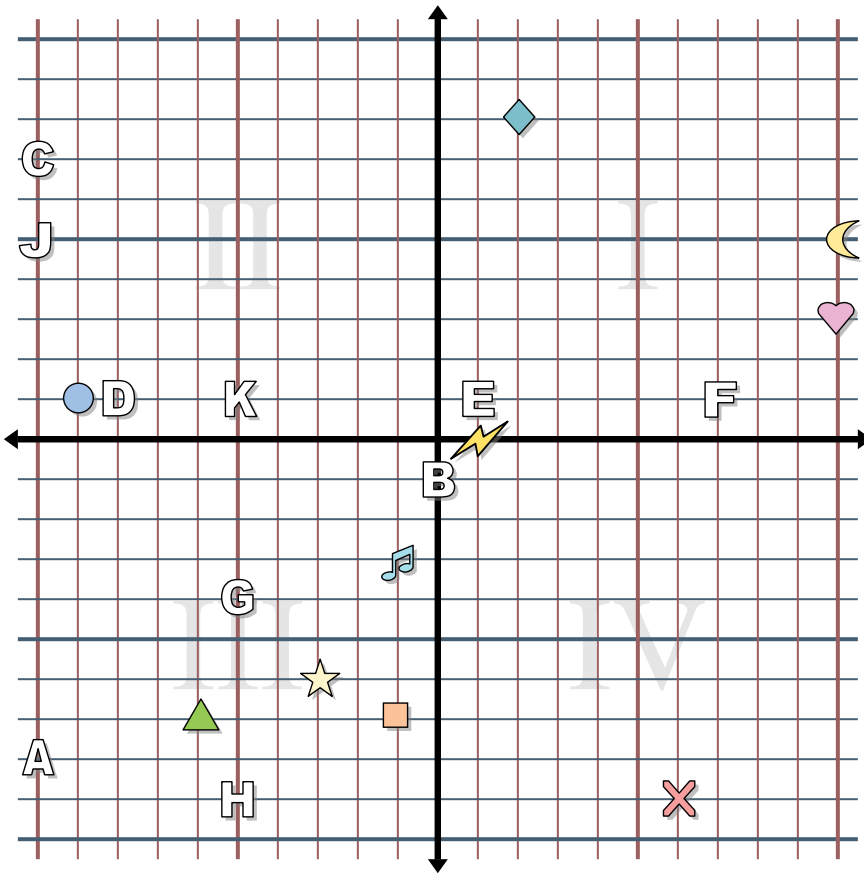
- | | |
|------------|----------------|
| 1) Star | 2) Lightning |
| 3) Circle | 4) Heart |
| 5) Cross | 6) Triangle |
| 7) Moon | 8) Square |
| 9) Diamond | 10) Music Note |

Determine which letter is at each coordinate.

- | | |
|--------------|---------------|
| 11) (-5, -6) | 12) (4, 4) |
| 13) (1, -7) | 14) (-6, -2) |
| 15) (-4, -1) | 16) (-2, 6) |
| 17) (6, -3) | 18) (4, 0) |
| 19) (-7, 4) | 20) (-5, -10) |



Answers



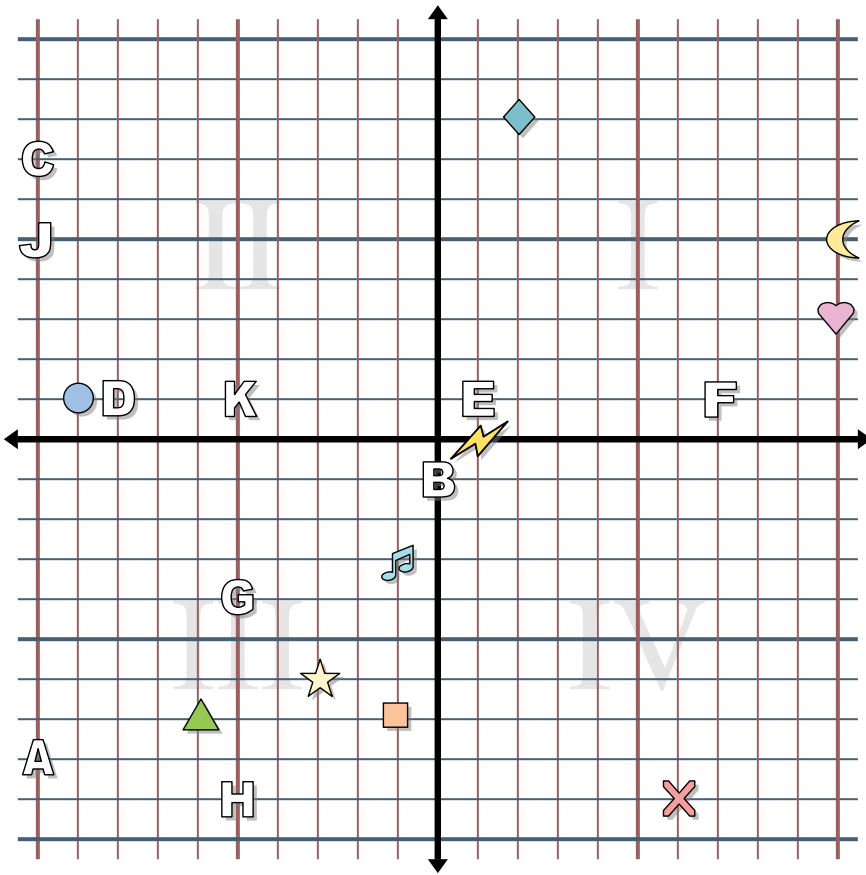
Determine the coordinates of each figure.

- 1) Star
- 2) Lightning
- 3) Circle
- 4) Heart
- 5) Cross
- 6) Triangle
- 7) Moon
- 8) Square
- 9) Diamond
- 10) Music Note

Determine which letter is at each coordinate.

- 11) (7, 1)
- 12) (-10, 5)
- 13) (0, -1)
- 14) (-8, 1)
- 15) (-5, -4)
- 16) (-5, -9)
- 17) (-5, 1)
- 18) (-10, 7)
- 19) (1, 1)
- 20) (-10, -8)

- 1. _____
- 2. _____
- 3. _____
- 4. _____
- 5. _____
- 6. _____
- 7. _____
- 8. _____
- 9. _____
- 10. _____
- 11. _____
- 12. _____
- 13. _____
- 14. _____
- 15. _____
- 16. _____
- 17. _____
- 18. _____
- 19. _____
- 20. _____



Answers

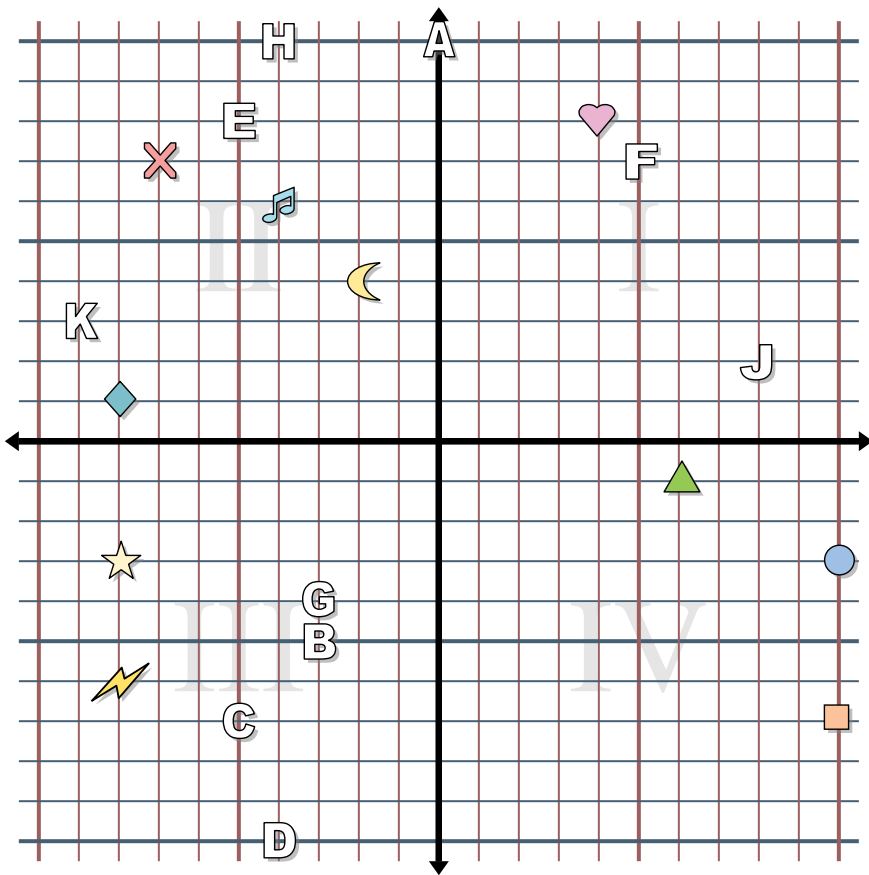
1. **(-3, -6)**
2. **(1, 0)**
3. **(-9, 1)**
4. **(10, 3)**
5. **(6, -9)**
6. **(-6, -7)**
7. **(10, 5)**
8. **(-1, -7)**
9. **(2, 8)**
10. **(-1, -3)**
11. **F**
12. **J**
13. **B**
14. **D**
15. **G**
16. **H**
17. **K**
18. **C**
19. **E**
20. **A**

Determine the coordinates of each figure.

- | | |
|------------|----------------|
| 1) Star | 2) Lightning |
| 3) Circle | 4) Heart |
| 5) Cross | 6) Triangle |
| 7) Moon | 8) Square |
| 9) Diamond | 10) Music Note |

Determine which letter is at each coordinate.

- | | |
|--------------|---------------|
| 11) (7, 1) | 12) (-10, 5) |
| 13) (0, -1) | 14) (-8, 1) |
| 15) (-5, -4) | 16) (-5, -9) |
| 17) (-5, 1) | 18) (-10, 7) |
| 19) (1, 1) | 20) (-10, -8) |



Answers

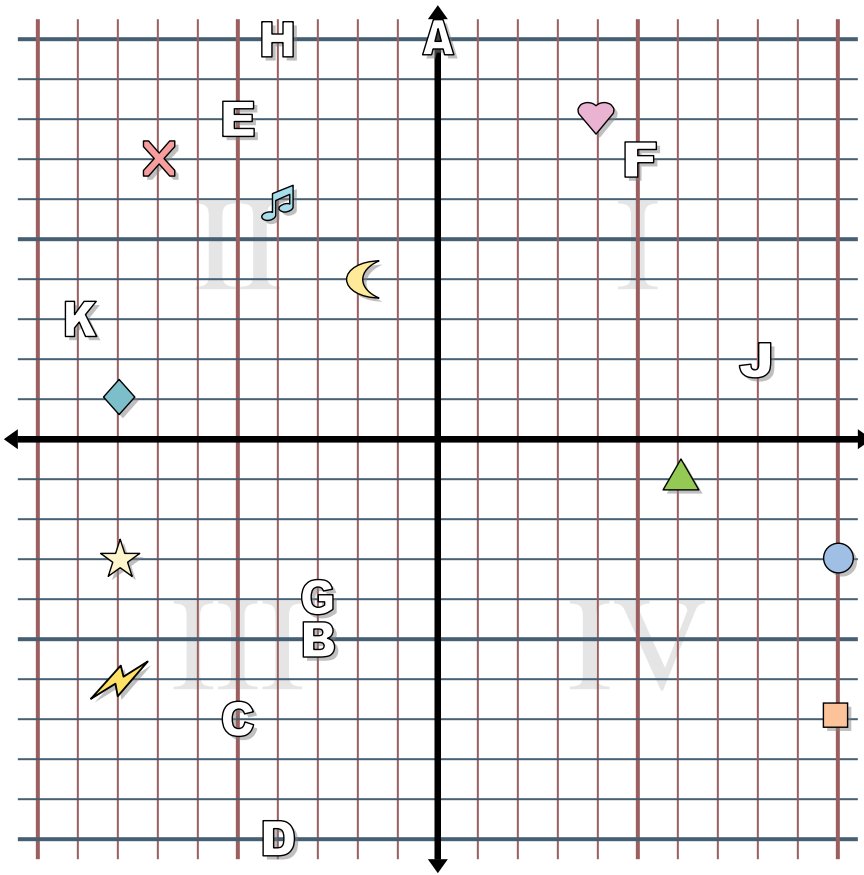
1. _____
2. _____
3. _____
4. _____
5. _____
6. _____
7. _____
8. _____
9. _____
10. _____
11. _____
12. _____
13. _____
14. _____
15. _____
16. _____
17. _____
18. _____
19. _____
20. _____

Determine the coordinates of each figure.

- | | |
|------------|----------------|
| 1) Star | 2) Lightning |
| 3) Circle | 4) Heart |
| 5) Cross | 6) Triangle |
| 7) Moon | 8) Square |
| 9) Diamond | 10) Music Note |

Determine which letter is at each coordinate.

- | | |
|---------------|----------------|
| 11) (-4 , 10) | 12) (0 , 10) |
| 13) (-5 , 8) | 14) (-3 , -4) |
| 15) (-9 , 3) | 16) (8 , 2) |
| 17) (-5 , -7) | 18) (-4 , -10) |
| 19) (5 , 7) | 20) (-3 , -5) |



Answers

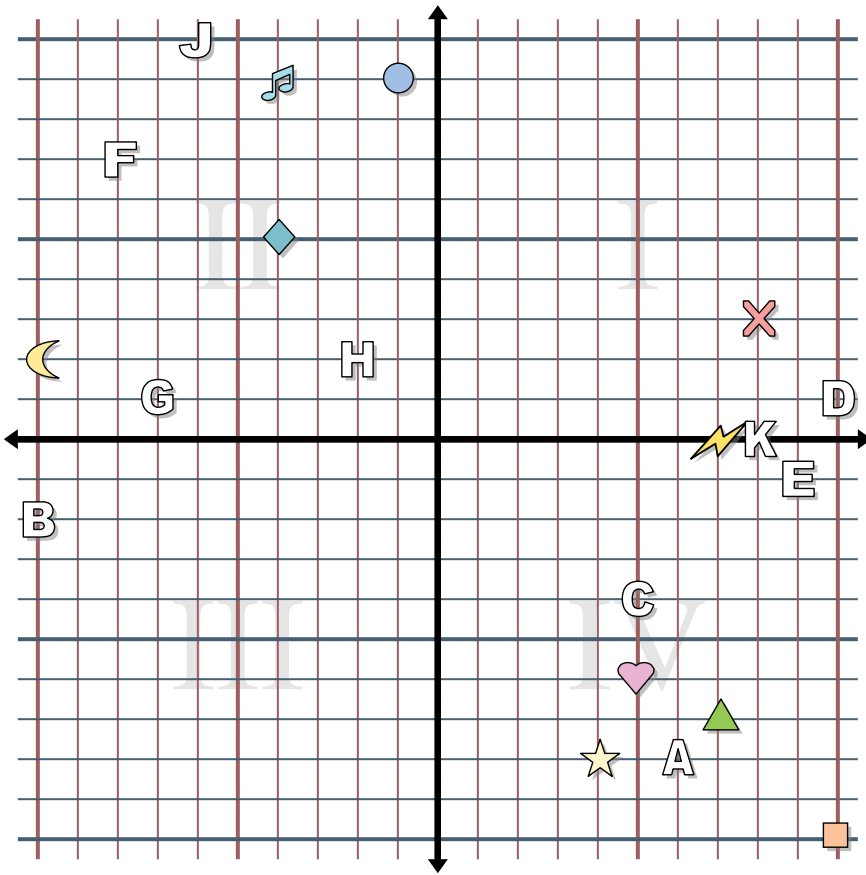
1. **(-8 , -3)**
2. **(-8 , -6)**
3. **(10 , -3)**
4. **(4 , 8)**
5. **(-7 , 7)**
6. **(6 , -1)**
7. **(-2 , 4)**
8. **(10 , -7)**
9. **(-8 , 1)**
10. **(-4 , 6)**
11. **H**
12. **A**
13. **E**
14. **G**
15. **K**
16. **J**
17. **C**
18. **D**
19. **F**
20. **B**

Determine the coordinates of each figure.

- | | |
|------------|----------------|
| 1) Star | 2) Lightning |
| 3) Circle | 4) Heart |
| 5) Cross | 6) Triangle |
| 7) Moon | 8) Square |
| 9) Diamond | 10) Music Note |

Determine which letter is at each coordinate.

- | | |
|---------------|----------------|
| 11) (-4 , 10) | 12) (0 , 10) |
| 13) (-5 , 8) | 14) (-3 , -4) |
| 15) (-9 , 3) | 16) (8 , 2) |
| 17) (-5 , -7) | 18) (-4 , -10) |
| 19) (5 , 7) | 20) (-3 , -5) |



Answers

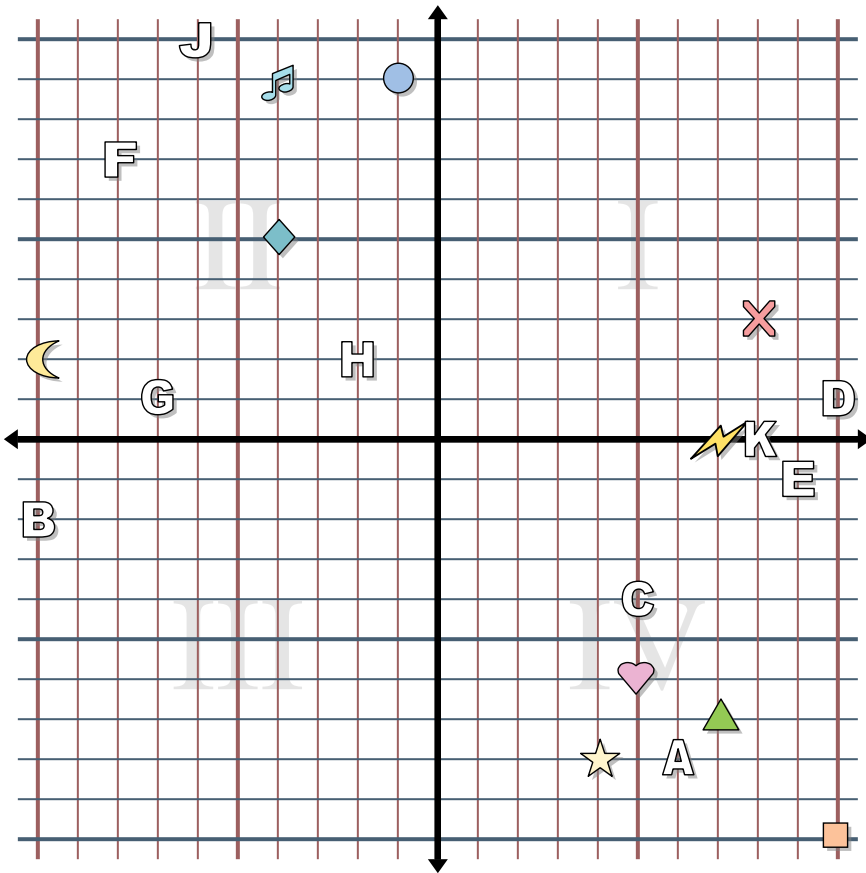
1. _____
2. _____
3. _____
4. _____
5. _____
6. _____
7. _____
8. _____
9. _____
10. _____
11. _____
12. _____
13. _____
14. _____
15. _____
16. _____
17. _____
18. _____
19. _____
20. _____

Determine the coordinates of each figure.

- | | |
|------------|----------------|
| 1) Star | 2) Lightning |
| 3) Circle | 4) Heart |
| 5) Cross | 6) Triangle |
| 7) Moon | 8) Square |
| 9) Diamond | 10) Music Note |

Determine which letter is at each coordinate.

- | | |
|----------------|---------------|
| 11) (-8 , 7) | 12) (6 , -8) |
| 13) (-7 , 1) | 14) (10 , 1) |
| 15) (-10 , -2) | 16) (8 , 0) |
| 17) (5 , -4) | 18) (-6 , 10) |
| 19) (9 , -1) | 20) (-2 , 2) |



Answers

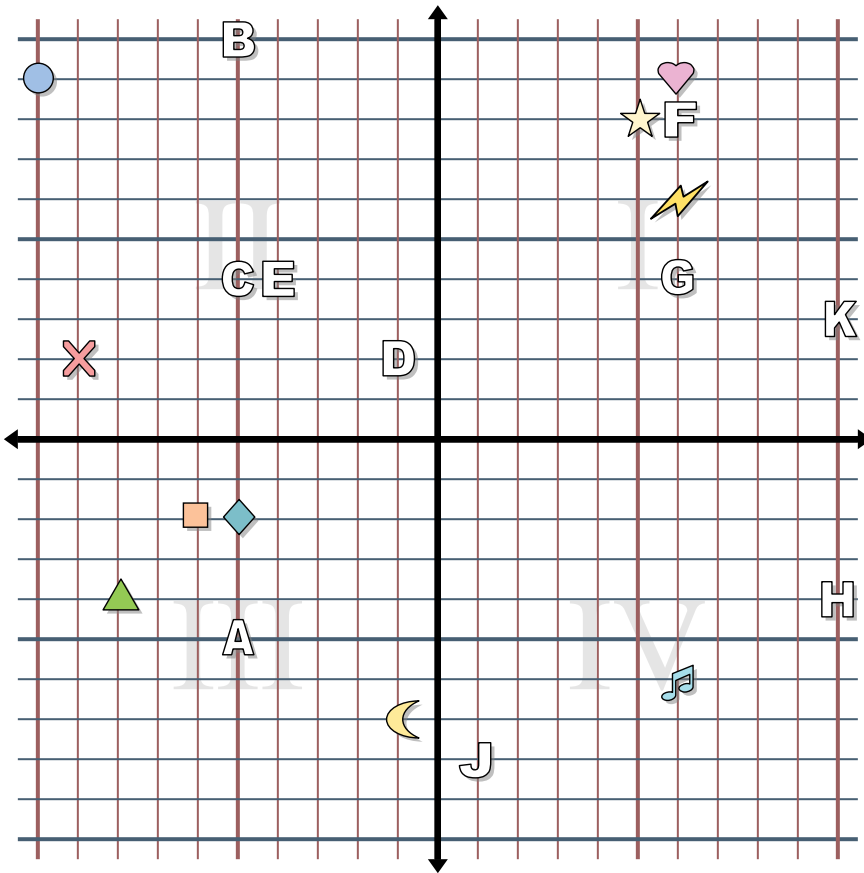
1. (4, -8)
2. (7, 0)
3. (-1, 9)
4. (5, -6)
5. (8, 3)
6. (7, -7)
7. (-10, 2)
8. (10, -10)
9. (-4, 5)
10. (-4, 9)
11. F
12. A
13. G
14. D
15. B
16. K
17. C
18. J
19. E
20. H

Determine the coordinates of each figure.

- | | |
|------------|----------------|
| 1) Star | 2) Lightning |
| 3) Circle | 4) Heart |
| 5) Cross | 6) Triangle |
| 7) Moon | 8) Square |
| 9) Diamond | 10) Music Note |

Determine which letter is at each coordinate.

- | | |
|---------------|--------------|
| 11) (-8, 7) | 12) (6, -8) |
| 13) (-7, 1) | 14) (10, 1) |
| 15) (-10, -2) | 16) (8, 0) |
| 17) (5, -4) | 18) (-6, 10) |
| 19) (9, -1) | 20) (-2, 2) |



Answers

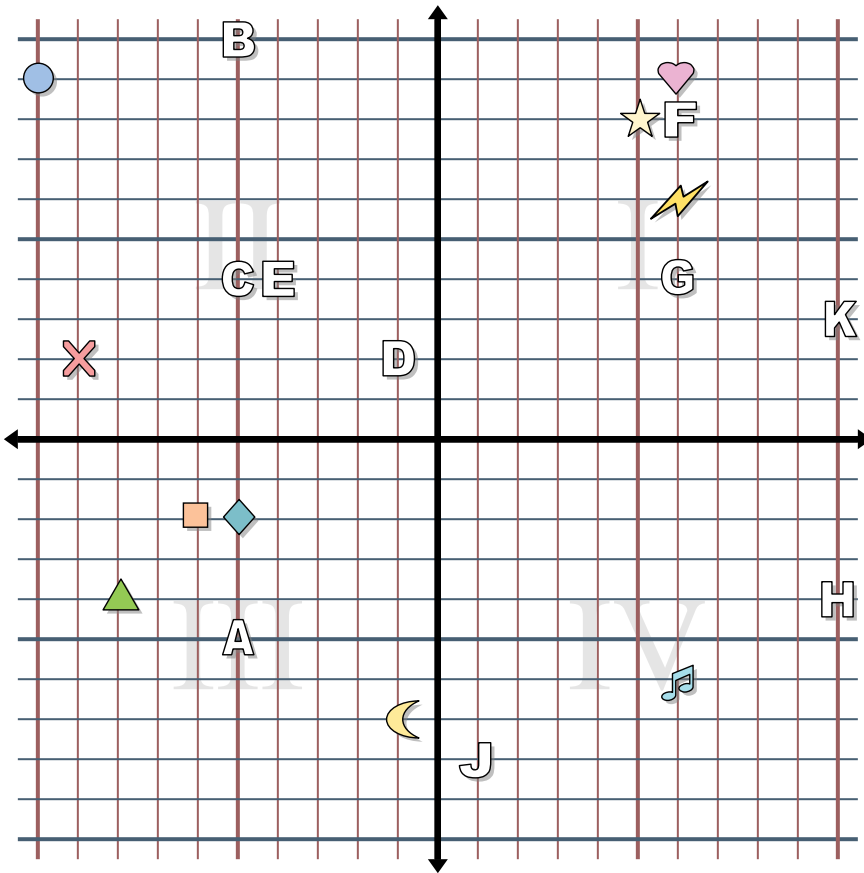
1. _____
2. _____
3. _____
4. _____
5. _____
6. _____
7. _____
8. _____
9. _____
10. _____
11. _____
12. _____
13. _____
14. _____
15. _____
16. _____
17. _____
18. _____
19. _____
20. _____

Determine the coordinates of each figure.

- | | |
|------------|----------------|
| 1) Star | 2) Lightning |
| 3) Circle | 4) Heart |
| 5) Cross | 6) Triangle |
| 7) Moon | 8) Square |
| 9) Diamond | 10) Music Note |

Determine which letter is at each coordinate.

- | | |
|--------------|--------------|
| 11) (1, -8) | 12) (10, 3) |
| 13) (6, 8) | 14) (6, 4) |
| 15) (10, -4) | 16) (-5, -5) |
| 17) (-4, 4) | 18) (-5, 4) |
| 19) (-1, 2) | 20) (-5, 10) |



Answers

1. (5, 8)
2. (6, 6)
3. (-10, 9)
4. (6, 9)
5. (-9, 2)
6. (-8, -4)
7. (-1, -7)
8. (-6, -2)
9. (-5, -2)
10. (6, -6)
11. J
12. K
13. F
14. G
15. H
16. A
17. E
18. C
19. D
20. B

Determine the coordinates of each figure.

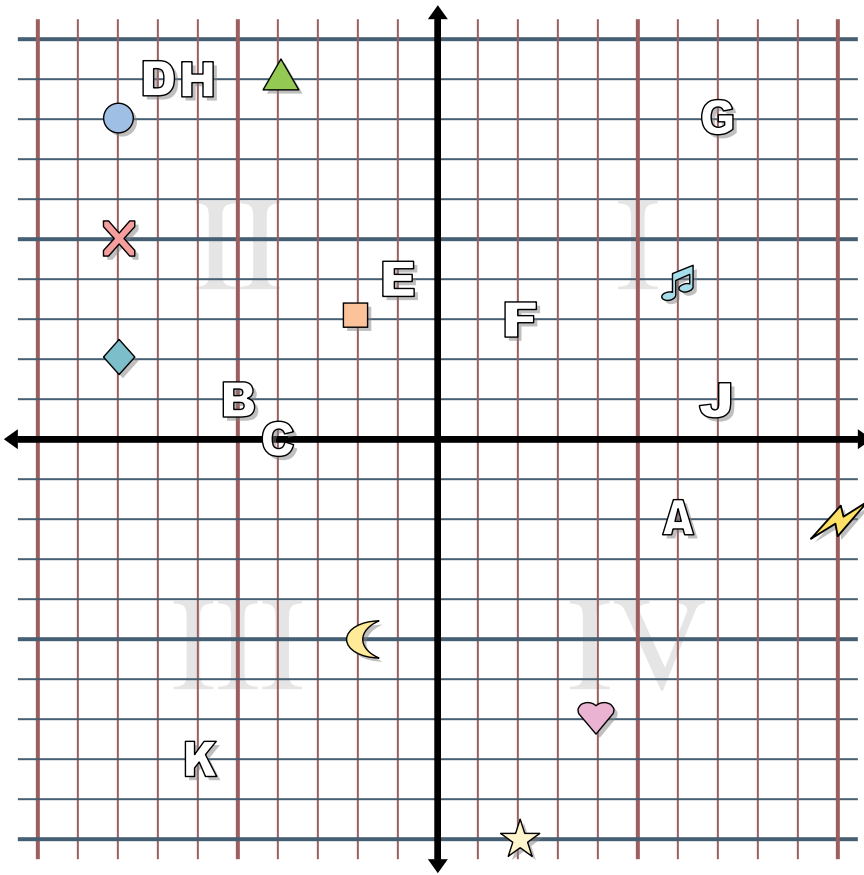
- | | |
|------------|----------------|
| 1) Star | 2) Lightning |
| 3) Circle | 4) Heart |
| 5) Cross | 6) Triangle |
| 7) Moon | 8) Square |
| 9) Diamond | 10) Music Note |

Determine which letter is at each coordinate.

- | | |
|--------------|--------------|
| 11) (1, -8) | 12) (10, 3) |
| 13) (6, 8) | 14) (6, 4) |
| 15) (10, -4) | 16) (-5, -5) |
| 17) (-4, 4) | 18) (-5, 4) |
| 19) (-1, 2) | 20) (-5, 10) |



Answers



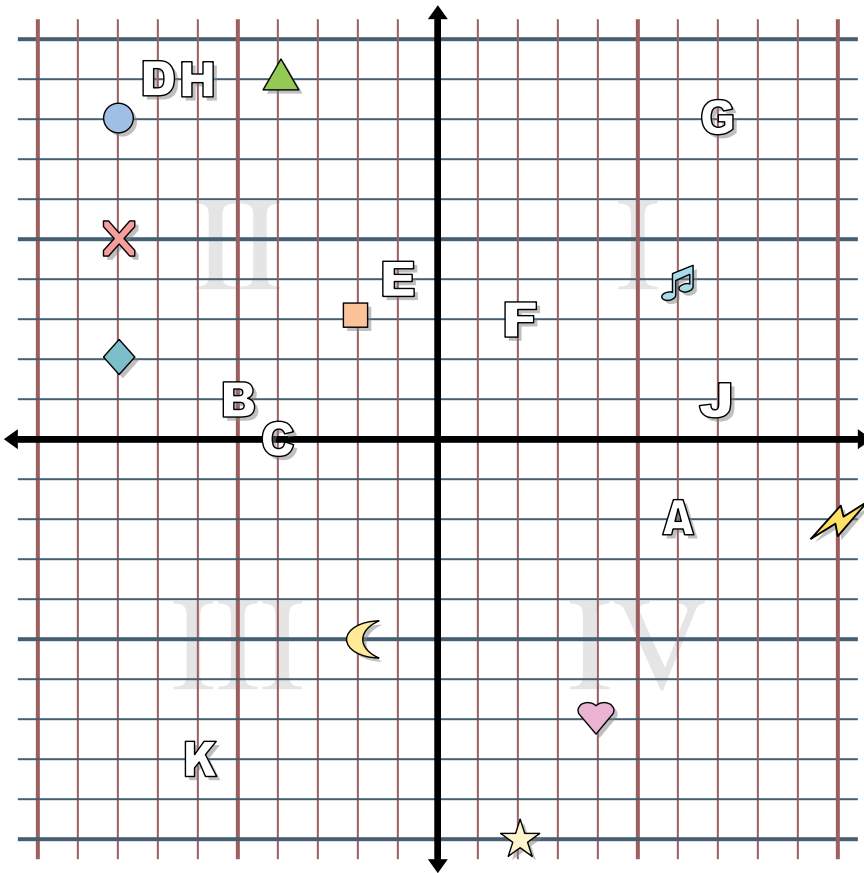
1. _____
2. _____
3. _____
4. _____
5. _____
6. _____
7. _____
8. _____
9. _____
10. _____
11. _____
12. _____
13. _____
14. _____
15. _____
16. _____
17. _____
18. _____
19. _____
20. _____

Determine the coordinates of each figure.

- | | |
|------------|----------------|
| 1) Star | 2) Lightning |
| 3) Circle | 4) Heart |
| 5) Cross | 6) Triangle |
| 7) Moon | 8) Square |
| 9) Diamond | 10) Music Note |

Determine which letter is at each coordinate.

- | | |
|--------------|---------------|
| 11) (-4 , 0) | 12) (2 , 3) |
| 13) (-7 , 9) | 14) (7 , 1) |
| 15) (7 , 8) | 16) (-5 , 1) |
| 17) (-6 , 9) | 18) (6 , -2) |
| 19) (-1 , 4) | 20) (-6 , -8) |



Answers

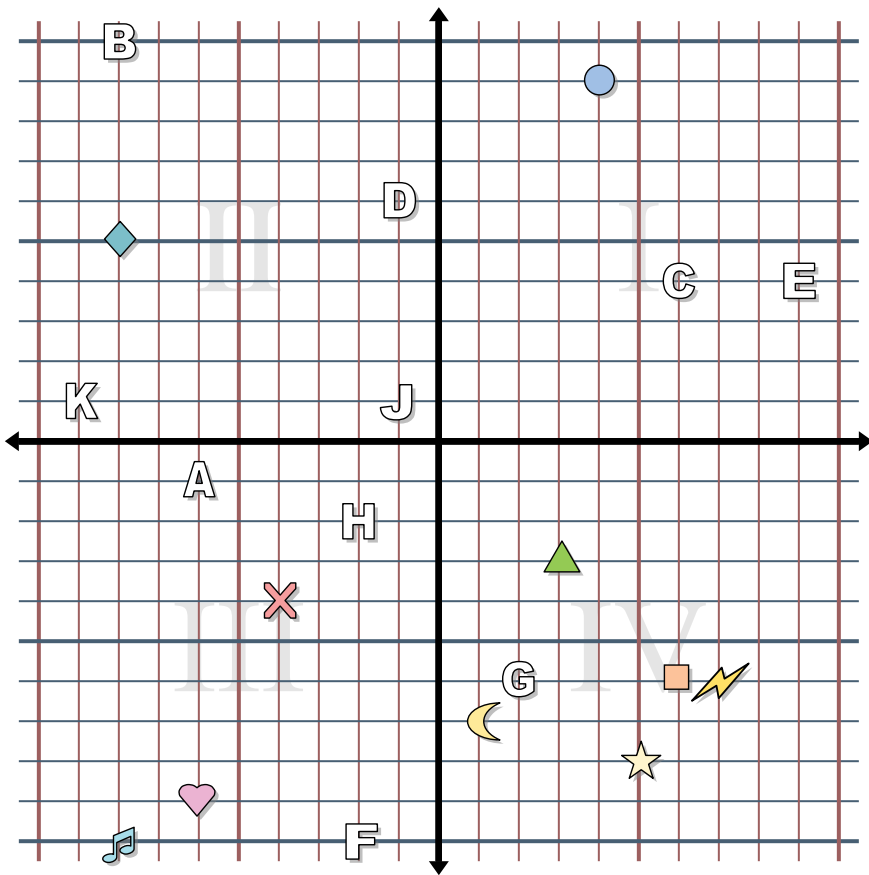
1. (2, -10)
2. (10, -2)
3. (-8, 8)
4. (4, -7)
5. (-8, 5)
6. (-4, 9)
7. (-2, -5)
8. (-2, 3)
9. (-8, 2)
10. (6, 4)
11. C
12. F
13. D
14. J
15. G
16. B
17. H
18. A
19. E
20. K

Determine the coordinates of each figure.

- | | |
|------------|----------------|
| 1) Star | 2) Lightning |
| 3) Circle | 4) Heart |
| 5) Cross | 6) Triangle |
| 7) Moon | 8) Square |
| 9) Diamond | 10) Music Note |

Determine which letter is at each coordinate.

- | | |
|-------------|--------------|
| 11) (-4, 0) | 12) (2, 3) |
| 13) (-7, 9) | 14) (7, 1) |
| 15) (7, 8) | 16) (-5, 1) |
| 17) (-6, 9) | 18) (6, -2) |
| 19) (-1, 4) | 20) (-6, -8) |



Answers

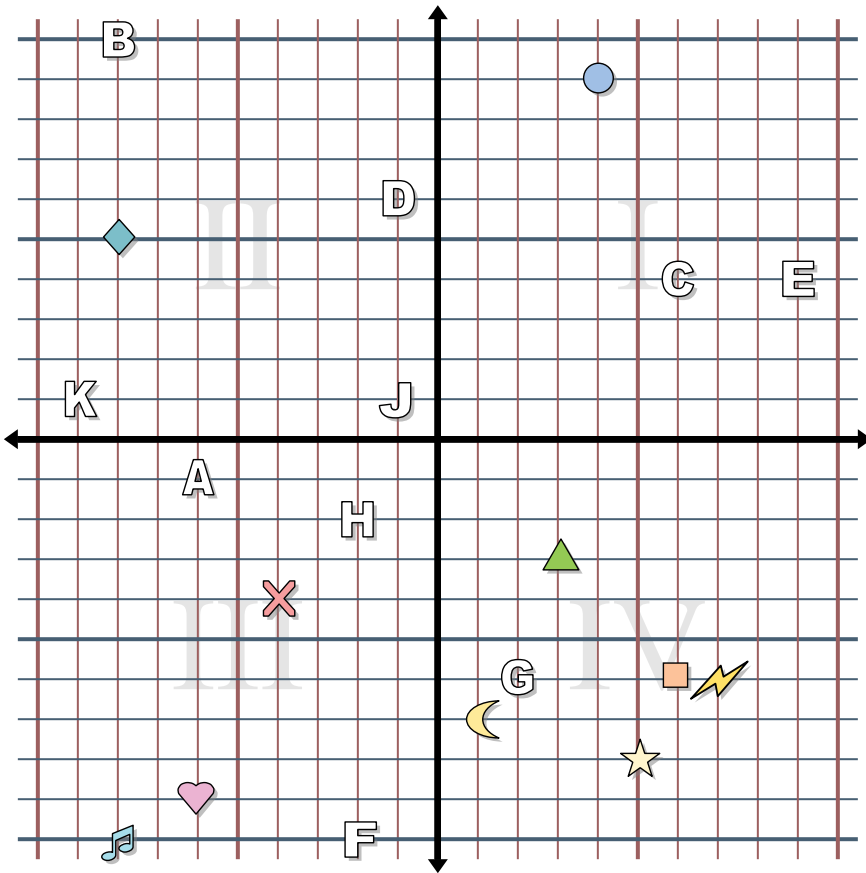
1. _____
2. _____
3. _____
4. _____
5. _____
6. _____
7. _____
8. _____
9. _____
10. _____
11. _____
12. _____
13. _____
14. _____
15. _____
16. _____
17. _____
18. _____
19. _____
20. _____

Determine the coordinates of each figure.

- | | |
|------------|----------------|
| 1) Star | 2) Lightning |
| 3) Circle | 4) Heart |
| 5) Cross | 6) Triangle |
| 7) Moon | 8) Square |
| 9) Diamond | 10) Music Note |

Determine which letter is at each coordinate.

- | | |
|---------------|----------------|
| 11) (-2 , -2) | 12) (9 , 4) |
| 13) (-8 , 10) | 14) (2 , -6) |
| 15) (-1 , 1) | 16) (-2 , -10) |
| 17) (-9 , 1) | 18) (-1 , 6) |
| 19) (6 , 4) | 20) (-6 , -1) |



Answers

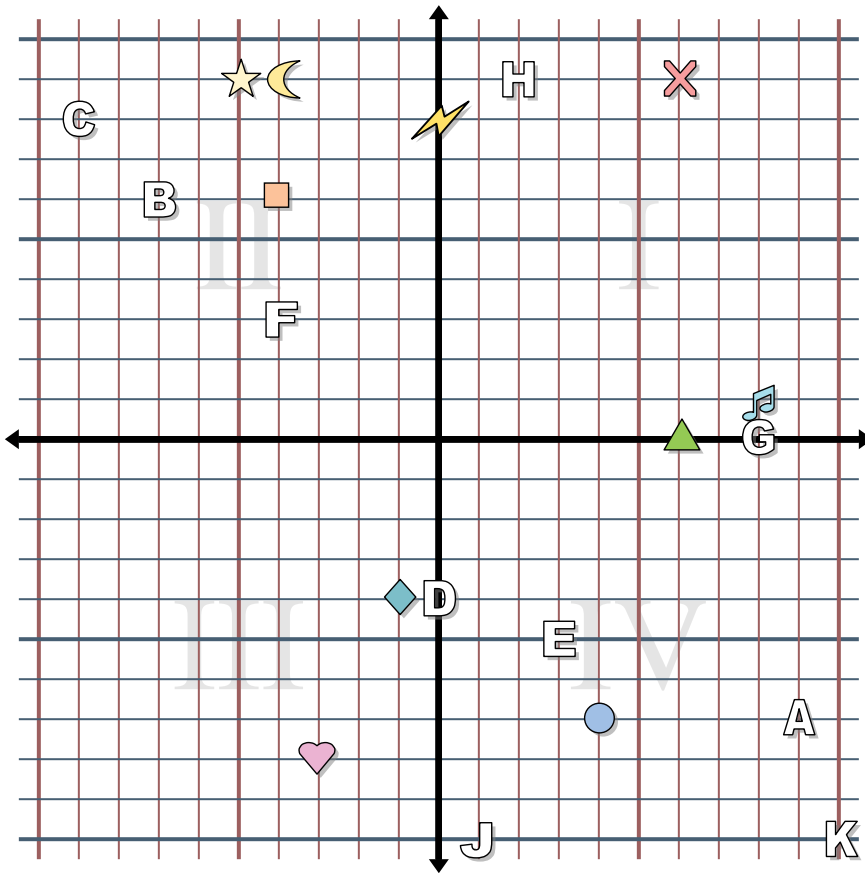
1. (5, -8)
2. (7, -6)
3. (4, 9)
4. (-6, -9)
5. (-4, -4)
6. (3, -3)
7. (1, -7)
8. (6, -6)
9. (-8, 5)
10. (-8, -10)
11. H
12. E
13. B
14. G
15. J
16. F
17. K
18. D
19. C
20. A

Determine the coordinates of each figure.

- | | |
|------------|----------------|
| 1) Star | 2) Lightning |
| 3) Circle | 4) Heart |
| 5) Cross | 6) Triangle |
| 7) Moon | 8) Square |
| 9) Diamond | 10) Music Note |

Determine which letter is at each coordinate.

- | | |
|--------------|---------------|
| 11) (-2, -2) | 12) (9, 4) |
| 13) (-8, 10) | 14) (2, -6) |
| 15) (-1, 1) | 16) (-2, -10) |
| 17) (-9, 1) | 18) (-1, 6) |
| 19) (6, 4) | 20) (-6, -1) |



Answers

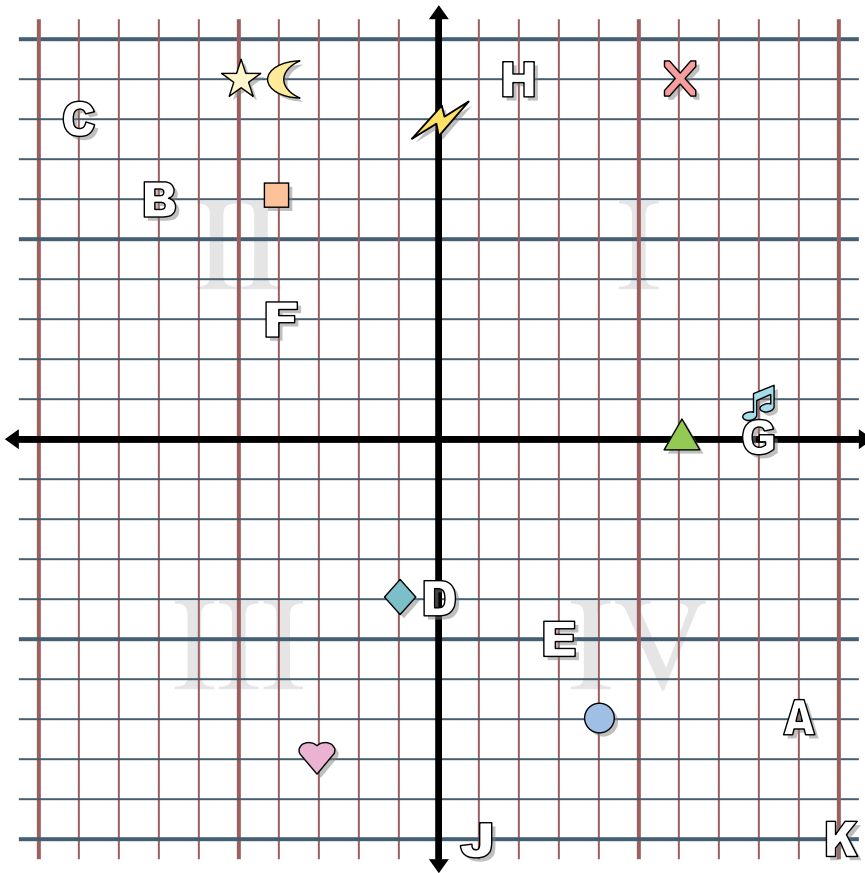
1. _____
2. _____
3. _____
4. _____
5. _____
6. _____
7. _____
8. _____
9. _____
10. _____
11. _____
12. _____
13. _____
14. _____
15. _____
16. _____
17. _____
18. _____
19. _____
20. _____

Determine the coordinates of each figure.

- | | |
|------------|----------------|
| 1) Star | 2) Lightning |
| 3) Circle | 4) Heart |
| 5) Cross | 6) Triangle |
| 7) Moon | 8) Square |
| 9) Diamond | 10) Music Note |

Determine which letter is at each coordinate.

- | | |
|---------------|----------------|
| 11) (-7 , 6) | 12) (-4 , 3) |
| 13) (3 , -5) | 14) (8 , 0) |
| 15) (0 , -4) | 16) (2 , 9) |
| 17) (1 , -10) | 18) (9 , -7) |
| 19) (-9 , 8) | 20) (10 , -10) |



Answers

1. (-5, 9)
2. (0, 8)
3. (4, -7)
4. (-3, -8)
5. (6, 9)
6. (6, 0)
7. (-4, 9)
8. (-4, 6)
9. (-1, -4)
10. (8, 1)
11. **B**
12. **F**
13. **E**
14. **G**
15. **D**
16. **H**
17. **J**
18. **A**
19. **C**
20. **K**

Determine the coordinates of each figure.

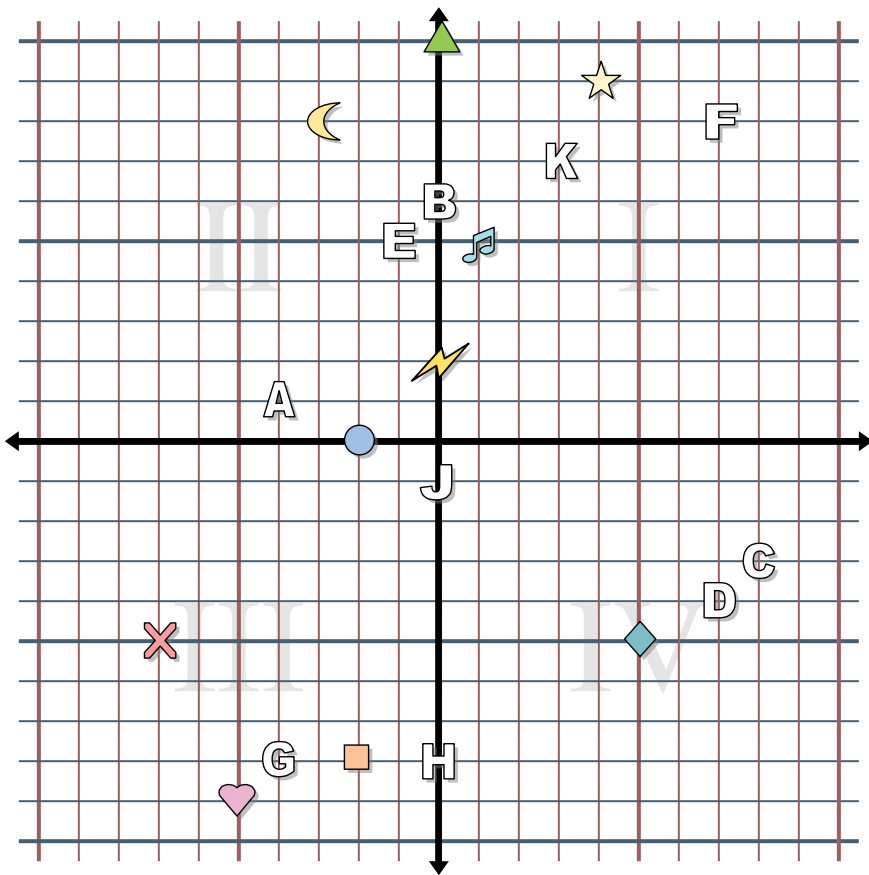
- | | |
|------------|----------------|
| 1) Star | 2) Lightning |
| 3) Circle | 4) Heart |
| 5) Cross | 6) Triangle |
| 7) Moon | 8) Square |
| 9) Diamond | 10) Music Note |

Determine which letter is at each coordinate.

- | | |
|--------------|---------------|
| 11) (-7, 6) | 12) (-4, 3) |
| 13) (3, -5) | 14) (8, 0) |
| 15) (0, -4) | 16) (2, 9) |
| 17) (1, -10) | 18) (9, -7) |
| 19) (-9, 8) | 20) (10, -10) |



Answers



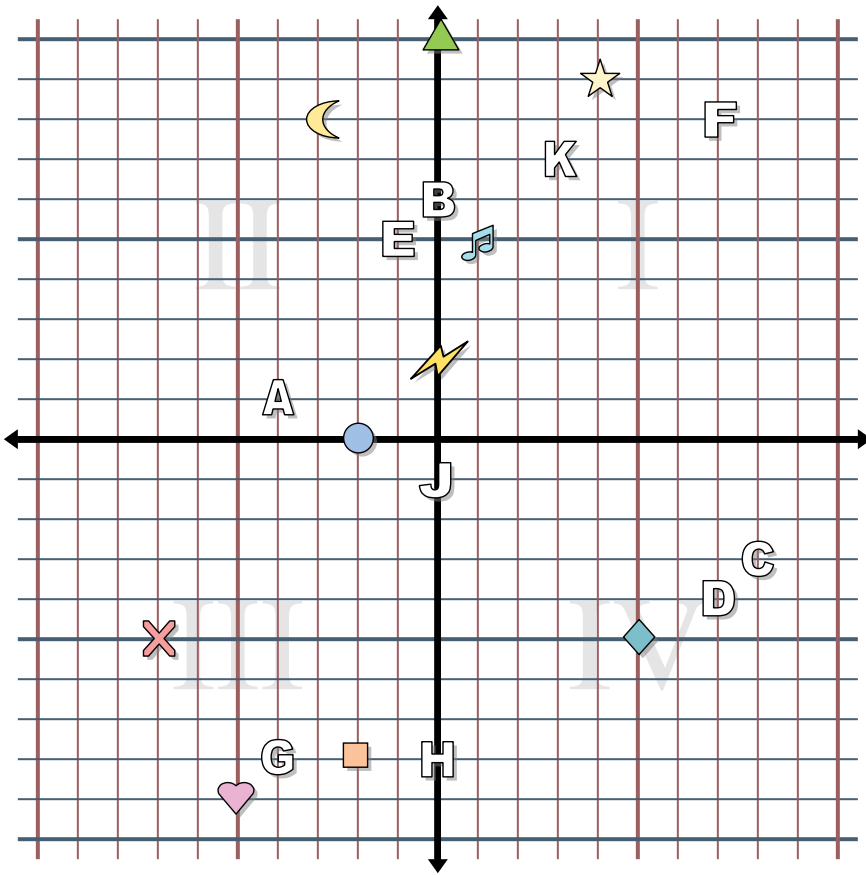
1. _____
2. _____
3. _____
4. _____
5. _____
6. _____
7. _____
8. _____
9. _____
10. _____
11. _____
12. _____
13. _____
14. _____
15. _____
16. _____
17. _____
18. _____
19. _____
20. _____

Determine the coordinates of each figure.

- | | |
|------------|----------------|
| 1) Star | 2) Lightning |
| 3) Circle | 4) Heart |
| 5) Cross | 6) Triangle |
| 7) Moon | 8) Square |
| 9) Diamond | 10) Music Note |

Determine which letter is at each coordinate.

- | | |
|-------------|--------------|
| 11) (7, -4) | 12) (7, 8) |
| 13) (8, -3) | 14) (-4, -8) |
| 15) (-1, 5) | 16) (-4, 1) |
| 17) (0, 6) | 18) (3, 7) |
| 19) (0, -1) | 20) (0, -8) |



Answers

1. (4, 9)
2. (0, 2)
3. (-2, 0)
4. (-5, -9)
5. (-7, -5)
6. (0, 10)
7. (-3, 8)
8. (-2, -8)
9. (5, -5)
10. (1, 5)
11. D
12. F
13. C
14. G
15. E
16. A
17. B
18. K
19. J
20. H

Determine the coordinates of each figure.

- | | |
|------------|----------------|
| 1) Star | 2) Lightning |
| 3) Circle | 4) Heart |
| 5) Cross | 6) Triangle |
| 7) Moon | 8) Square |
| 9) Diamond | 10) Music Note |

Determine which letter is at each coordinate.

- | | |
|-------------|--------------|
| 11) (7, -4) | 12) (7, 8) |
| 13) (8, -3) | 14) (-4, -8) |
| 15) (-1, 5) | 16) (-4, 1) |
| 17) (0, 6) | 18) (3, 7) |
| 19) (0, -1) | 20) (0, -8) |